


QUIZ 12

# How Many Quarter Note Beats in a Measure?

**DIRECTIONS:** If a quarter note gets one beat, how many beats are there in the measure? Write the correct answer in the space.

1. \_\_\_\_\_ 

8. \_\_\_\_\_ 

2. \_\_\_\_\_ 

9. \_\_\_\_\_ 

3. \_\_\_\_\_ 

10. \_\_\_\_\_ 

4. \_\_\_\_\_ 


11. \_\_\_\_\_ 

5. \_\_\_\_\_ 

12. \_\_\_\_\_ 

6. \_\_\_\_\_ 


13. \_\_\_\_\_ 

7. \_\_\_\_\_ 


14. \_\_\_\_\_ 


# How Many Half and Eighth Note Beats in a Measure?


**DIRECTIONS:** If a half note gets one beat, how many beats are there in the measure? Write the correct answer in the space.


1. \_\_\_\_\_ 

4. \_\_\_\_\_ 

2. \_\_\_\_\_ 

5. \_\_\_\_\_ 

3. \_\_\_\_\_ 

6. \_\_\_\_\_ 

**DIRECTIONS:** If an eighth note gets one beat, how many beats are there in the measure? Write the correct answer in the space.

7. \_\_\_\_\_ 

11. \_\_\_\_\_ 

8. \_\_\_\_\_ 

12. \_\_\_\_\_ 

9. \_\_\_\_\_ 

13. \_\_\_\_\_ 

10. \_\_\_\_\_ 

14. \_\_\_\_\_ 



Quiz 15

# Barlines and Measures— Half and Eighth Note Beat

**DIRECTIONS:** In examples 1–4 below, a half note gets one beat.

In examples 1 and 2, draw barlines after every three beats.

1.

2.

In examples 3 and 4, draw barlines after every two beats.

3.

4.

**DIRECTIONS:** In examples 5–8 below, an eighth note gets one beat.

In examples 5 and 6, draw barlines after every six beats.

5.

6.

In example 7, draw barlines after every four beats.

7.

In example 8, draw barlines after every three beats.

8.